



NAME _____ DATE _____

IDENTIFY SIDES AND CORNERS


How many corners and straight lines does each of the shapes below have?

1)



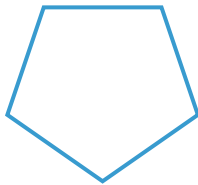
___ corners.
___ straight lines.

2)



___ corners.
___ straight lines.

3)




___ corners.
___ straight lines.

4)




___ corners.
___ straight lines.

5)



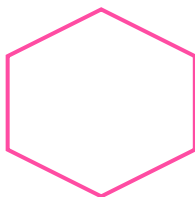
___ corners.
___ straight lines.

6)



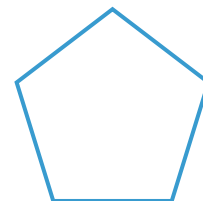
___ corners.
___ straight lines.

7)



___ corners.
___ straight lines.

8)



___ corners.
___ straight lines.